

3KA - Mrs Armstrong's Maths Homework

Set 15.03.19

Due in 20.03.19

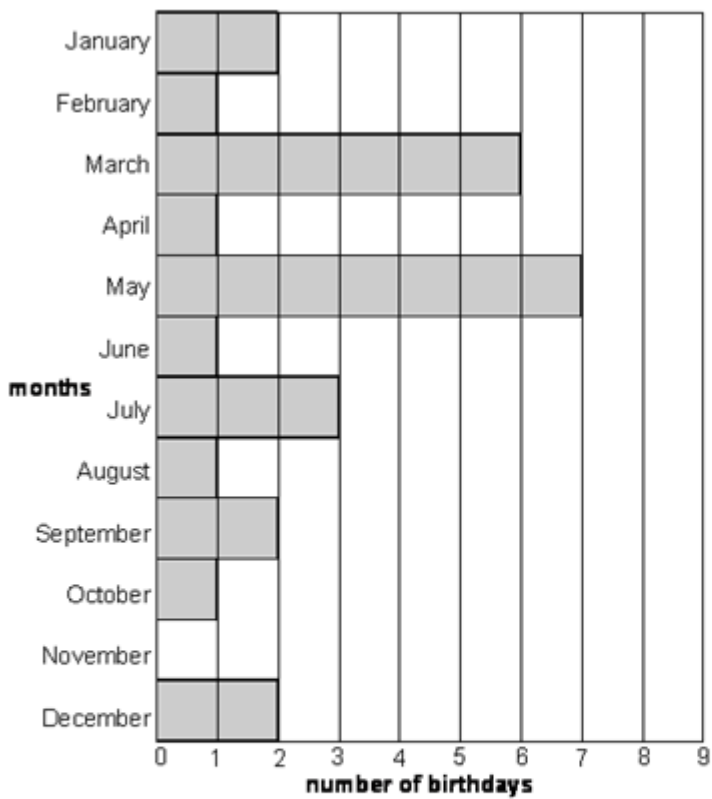
For homework this week, I would like you to revise a lot of the skills we have learnt in Year 3.

- a. $\frac{3}{4}$ of 24 =
- b. 8^2
- c. 1000 more than 19716
- d. Factors of 32
- e. Double 251
- f. $9 \div 10 =$
- g. $14.5 \times 100 =$
- h. _____ = $6885 - 745$
- i. How many degrees in a right angle?
- j. Write a decimal between 4.9 and 5.9
- k. What is the value of the underlined digit? $8\underline{7}673$
- l. 334 is 100 more than _____
- m. MCV =
- n. Can you order these numbers smallest to biggest 1324 1422 1332 1423 1221
- o. Round 387 to the nearest 100
- p. Round 7.5 to the nearest whole number
- q. Round 936 to the nearest 10
- r. What is 9.15pm in the 24 hour clock?

Please use a **formal written method** to solve the following calculations. These need to be written out into your book, and answered showing me your **workings out**.

1. $33 + 48 + 12 =$	4. $2296 - 829 =$	6. $78 \times 5 =$	8. $74 \div 3 =$
2. $4363 + 293 =$	5. $2382 - 1984 =$	7. $346 \times 2 =$	9. $734 \div 4 =$
3. $4.56 + 8.9 =$			

Our birthday months



(a) In which months are there more than five birthdays?

.....

1 mark

(b) How many children were born from July to December?

.....

1 mark

Complete the table.

Number	Roman Numerals
LX	60
LXXVI	
XCIII	

2 marks

Q20. Here are two clock faces.

Join each clock face to the correct digital time.



9:20

3:40

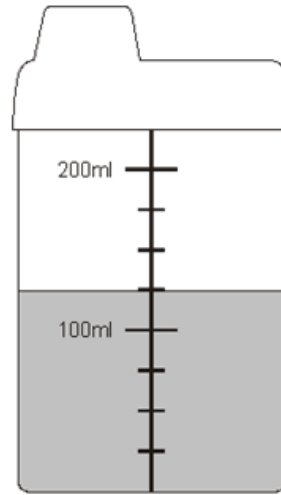
4:40

8:40

8:20

4:20

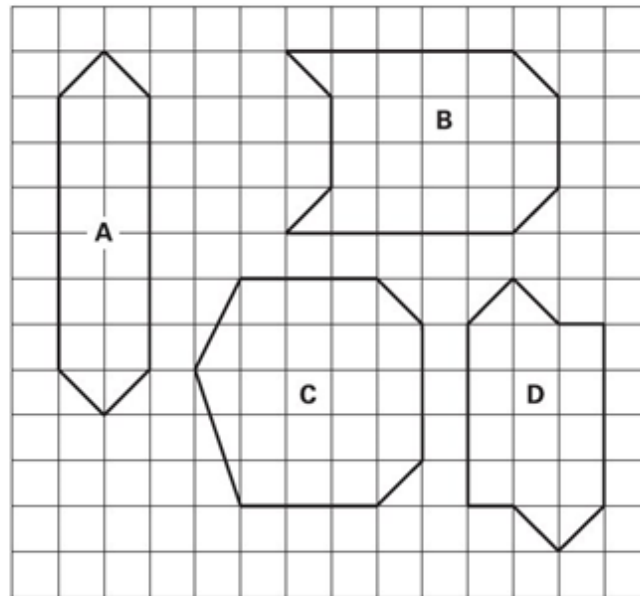
Q3. Here is a baby's drinking cup.



How many millilitres of water are in the cup?

ml

Q4. Here are four shapes on a square grid.



Complete the table.

	property of shape	
	is an octagon	has at least 1 right angle
shape A	x	✓
shape B	✓	x
shape C		