

# Year 2 Maths Homework

Date set: Friday 10<sup>th</sup> May 2019  
Date due in: Wednesday 15<sup>th</sup> May 2019

## Mental Maths

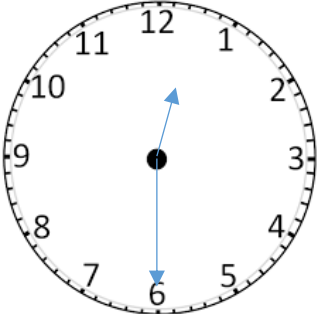
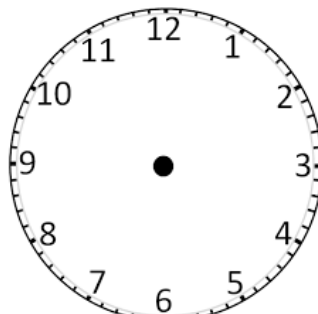
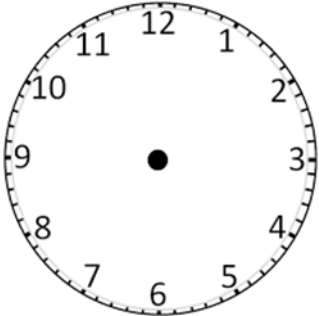
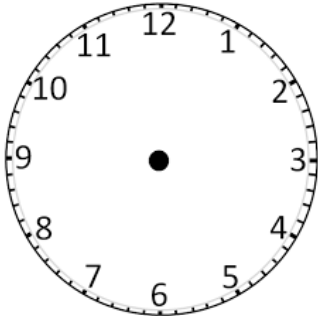
Write down 5 number bonds to 10  
Write down 5 number bonds to 20

Remember a number bond is two numbers that add together to make a number.

Challenge: Write 5 number bonds to 100.

Task: Write an activity you do in the day and draw the time you did it on the clock face.

Challenge: Write down the time you finished the activity on the line and work out how long it took you.

<p>I ate lunch</p> <hr/>  <p>I finished at 1 o'clock.</p> <hr/> <p>It took me half an hour to eat my lunch.</p> <hr/> <hr/>	<hr/>  <hr/> <hr/> <hr/>
<hr/>  <hr/> <hr/> <hr/>	<hr/>  <hr/> <hr/> <hr/>

