

# Year 1 Home Learning Pack

## Handwriting Practice

a b c d e f g h i j  
k l m n o p q r s t  
u v w x y z

a b c d e f g h i j  
k l m n o p q r s t  
u v w x y z

Blank handwriting practice lines consisting of a solid top line, a dashed middle line, and a solid bottom line.

Blank handwriting practice lines consisting of a solid top line, a dashed middle line, and a solid bottom line.

# Spot the Split Digraph

Circle all the words that contain a split digraph.  
How many can you find?

Jake went to the park with his little sister, Kate. They wanted to fly their new blue kite. Nine of their mates were there, playing on their skateboards.

They sat together and ate their picnic lunch. Jake and Kate shared a big cake that their dad had baked.

After lunch, they saw a huge snake near the lake! They raced home to tell their mum.

'I'll phone the zoo,' she said, 'so they can catch it, before it slides away and hides.'

Write the words in the table. Can you read them?

<i>a_e</i>	<i>e_e</i>	<i>i_e</i>	<i>o_e</i>	<i>u_e</i>

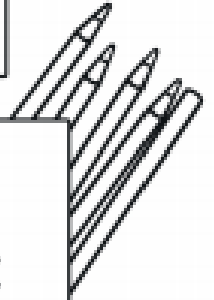
Can you spot which words are real and nonsense?  
Fill in the key, read the words and then colour in the  
correct boxes below.

## 'ou' sound

Key

Real Words

Nonsense Words



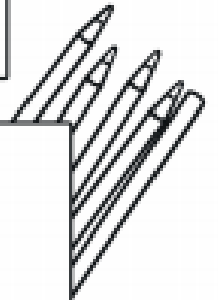
gloud	hout	plout	wout
found	cout	sound	foun
koun	pound	round	joud
out	count	loun	mouth
	around	mountain	

# 'oe' sound

Key

Real Words

Nonsense Words

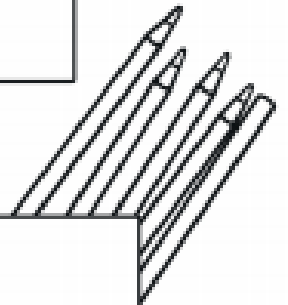


coes	doe	stroee	toe
woe	peroes	koe	tomatoes
vloe	heroes	goel	joe
dominoes	moes	neroes	goes
pominoes	dotatoes	foe	potatoes

'ew' sound

Key

Real Words <input type="checkbox"/>	Nonsense Words <input type="checkbox"/>
-------------------------------------	---



chew	jephew	grew	whew
frew	screw	blew	bew
threw	crew	dephew	brew
jewb	mew	tew	nephew

## Bats

There are more than 950 different kinds of bat.

Bats can fly.

They have hair or fur on their bodies.

### Fascinating Facts

Bats sleep in the day and are awake at night.


Bats can live to be 30 years old.

Bats sleep upside down so they can fly away quickly if they need to.

### Where Do They Live?

Bats live in a roost.

They live where it is warm and dark, like in trees and caves.



### What Do Bats eat?

Bats in the UK like to eat insects.

They can catch and eat them in the air.

Other bats eat fruit, flowers, fish, frogs, blood and even other bats!



# Questions

Answer the questions below in full sentences.

1. How many different types of bats are there in the world? \_\_\_\_\_

---

2. What do bats do in the day?? \_\_\_\_\_

---

3. How old can bats live to? \_\_\_\_\_

---

4. Why do bats sleep upside down? \_\_\_\_\_

---

5. Where do bats live? \_\_\_\_\_

---

6. What do bats in the UK eat? \_\_\_\_\_

---

## Writing Focus

Write a setting description for the picture below.

Remember to include Capital Letters, Finger Spaces, Full Stops. Use lots of adjectives, verbs and adverbs to make your writing exciting!



Adjectives	Verbs	Adverbs
blue	jumped	quickly
soft	swam	slowly
cold	flew	quietly
deep	built	carefully
fluffy	played	gently

Challenge can you use an exclamation mark?





# Mental Maths

Can you fill in the missing number bonds to 10?

A large star in the center contains the number 10. Surrounding it are ten smaller stars, each containing a number followed by a plus sign and a square box for an answer. The numbers are arranged in a circle around the center star. The numbers are: 6, 8, 2, 9, 3, 0, 4, 7, 1, and 5.

6 +

8 +

2 +

9 +

3 +

0 +

4 +

7 +

1 +

5 +

10 +

Now complete these missing number bonds to  
20

20	
	8

20	
	6

20	
15	

20	
11	

20	
	13

20	
10	

20	
10	

20	
	16

20	
	3

20	
	2


Challenge: What other number bonds to 20 do you know?






## Statistics

It is the end of the week and these are the fruits and vegetables left over from snack at school.

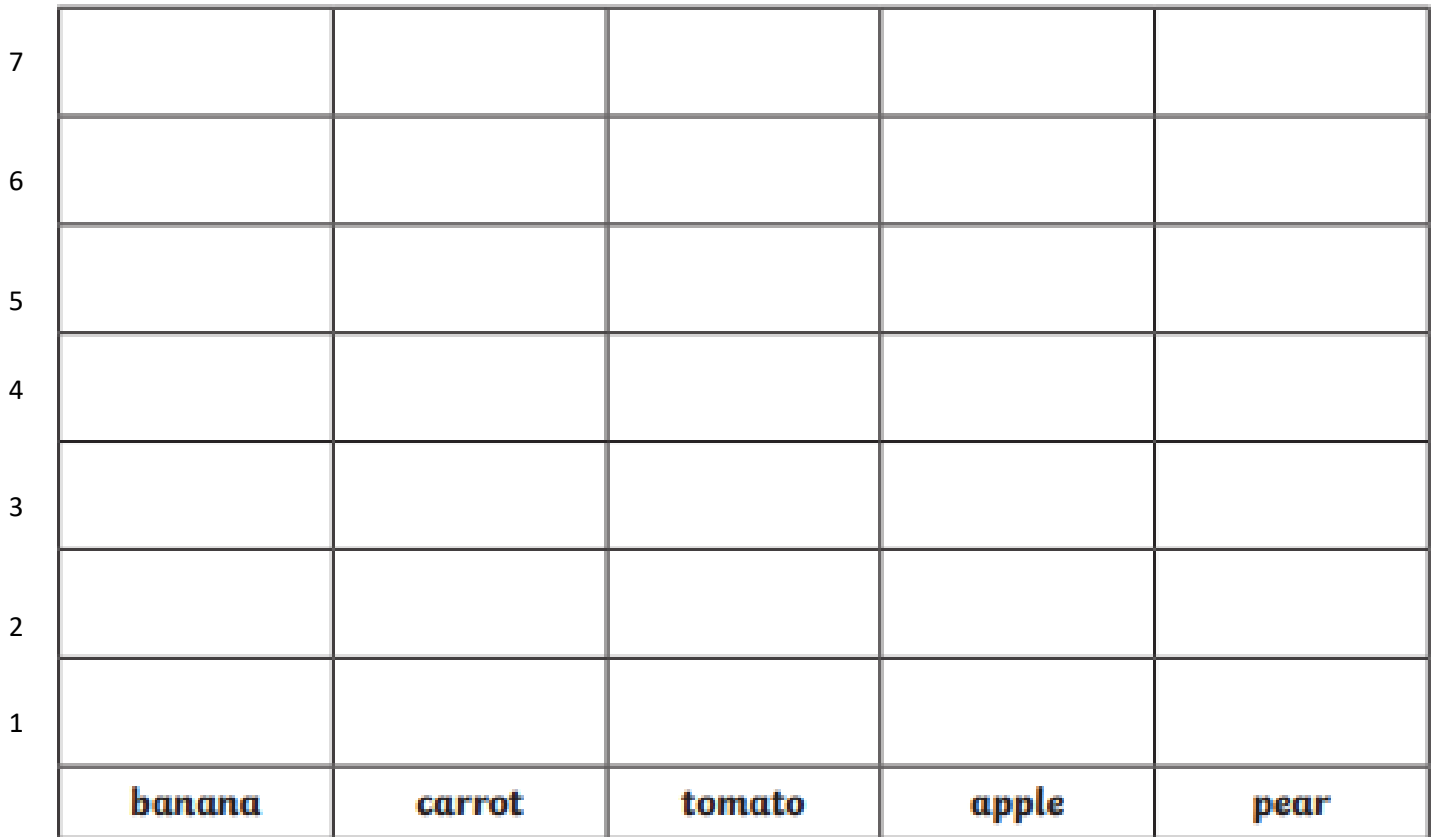
Create a tally chart to show what is left.

Remember  $1 = 1$  and  $\text{III} = 5$



Tally Chart		
	Tally	Total
		
		
		
		
		

Put your data into this graph, colouring one square for each piece of fruit.



Use your graph to answer these questions.

How many bananas were left?

---

How many pears were left?

---

How many tomatoes and carrots were left altogether?

---

Which fruit had the fewest number of pieces left?

---

How many fruit and vegetables were left altogether?

---